

Plus 0 or 1

Read the code

Match each answer to a letter. What is the message?

1	2	3	4	5	6	7	8	9	10
E	O	Y	D	N	U	A	I	R	Z

$1 + 3 = \underline{\quad}$		$7 + 1 = \underline{\quad}$		$4 + 0 = \underline{\quad}$	
$1 + 2 = \underline{\quad}$		$1 + 1 = \underline{\quad}$		$5 + 1 = \underline{\quad}$	
$6 + 1 = \underline{\quad}$		$0 + 4 = \underline{\quad}$		$3 + 1 = \underline{\quad}$	
$2 + 0 = \underline{\quad}$		$1 + 4 = \underline{\quad}$		$1 + 0 = \underline{\quad}$	
$1 + 1 = \underline{\quad}$		$9 + 0 = \underline{\quad}$		$1 + 9 = \underline{\quad}$	
$0 + 1 = \underline{\quad}$		$1 + 8 = \underline{\quad}$		$0 + 2 = \underline{\quad}$	

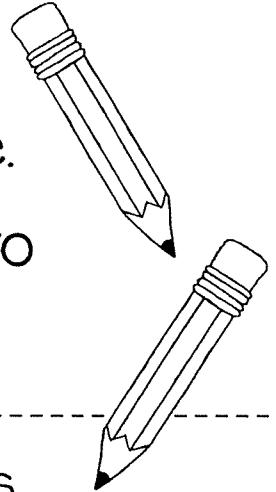
The code says:

_____?

How Many Pencils?

1 Read.

Dizzy tipped 47 pencils onto the table.
How would you organise the pencils to
make them easier to count?



2 Underline the question. 3 Circle the facts.

4 Draw a picture.

5 Show your partner how you organised your pencils.
Talk about how your picture would look if Dizzy took
5 pencils away.

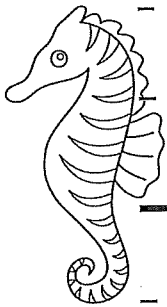

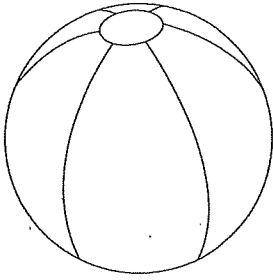
How many pencils would be left? _____ pencils.

Name: _____

Writing on the Lines

Lower case b

(a head and body letter)



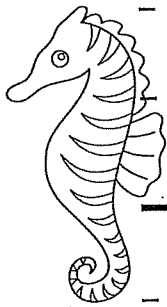
b

b

b

b

b



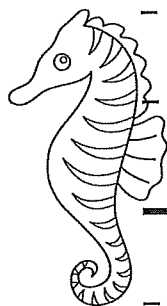
b

b

b

b

b

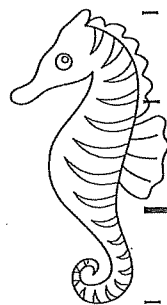


b

b

b

b



b


b

Name: _____
Date: _____



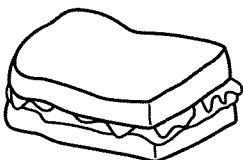


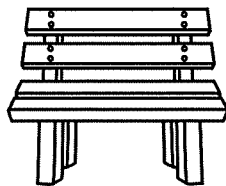


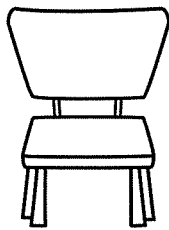

ch


Starts with CH

Ends with CH



©laurengraceclough





Arrange these words into a full sentence.

boy The is a shirt.
wearing blue
